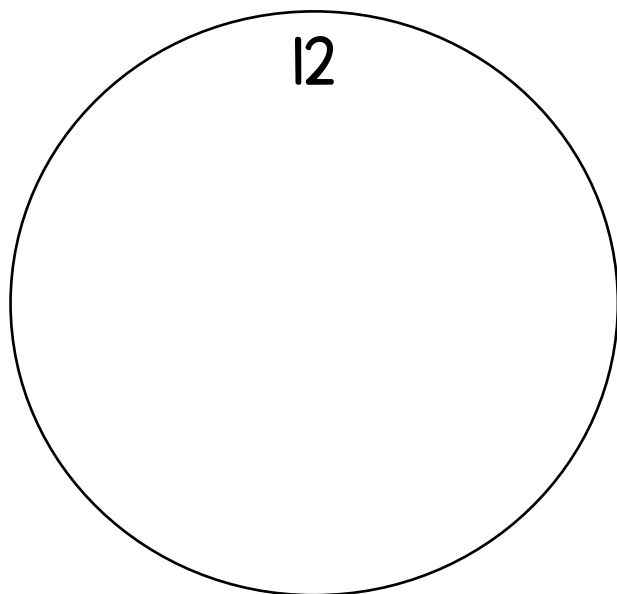


Fill in the numbers on the clock.
The first one is done for you!

1T


___ / ___ / ___



Draw an hour hand and a minute hand on the clock. Label them.

2T

___ / ___ / ___



How are the hour hand and minute hand the same? How are they different?

3T

___ / ___ / ___


Same

Different

What time does this clock show?
Write it in digital form.

4T

___ / ___ / ___




___ : ___

What time does this clock show?

Write it in digital form.

5 T

___ / ___ / ___




___ : ___

What time does this clock show?

Write it using o'clock.

6 T

___ / ___ / ___




___ o'clock.

What time does this clock show?

Write it using half past.

7T

___ / ___ / ___




It is half past ____.

What time does this clock show? Write it using thirty.

8T

___ / ___ / ___




It is ____ thirty.

What time does this clock show?

Write it using half past.

9T

___ / ___ / ___




It is half past ____.

What time does this clock show? Write it using thirty.

10T

___ / ___ / ___



It is ____ thirty.

What time does this clock show?

Write it using o'clock.

11T

___ / ___ / ___



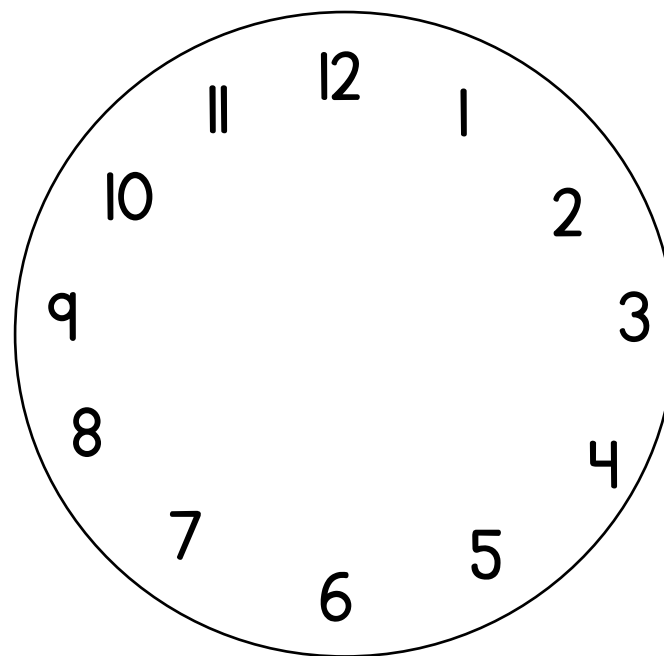
___ o'clock.

What time does this clock show? Write it in analog form.



12T

___ / ___ / ___



Do you agree or disagree with this statement? Why? Draw and write to explain.

Half past 5 is the same as 6:30.

13T ____ / ____ / ____

I agree/disagree because



Do you agree or disagree with this statement? Why? Draw and write to explain.

Telling time is important.

14T ____ / ____ / ____

I agree/disagree because



Do you agree or disagree with this statement? Why? Draw and write to explain.

1 hour is the same as 60 minutes.

15 T / /

I agree/disagree because

